

**SANSKAR SCHOOL**

**GRADE-IV**

**Assignment 38**

**Date: Monday, 24<sup>th</sup> August 2020**

**ENGLISH:**

Degree of Comparison: Do exercise D and E in the book.

**MATHS:**

**Assessment 8**

**Basic Geometry**



**Solve the following questions in your Assessment notebook.**

Q1. Define the following terms.

a) Open curve

b) Polygons

Q2. Identify the following figures and write their names.



Q3. Draw the line segments of the following measures using a ruler.

a) 6 cm

b) 9 cm 7 mm

Q4. Fill in the blanks.

a) A \_\_\_\_\_ has fixed length. (Line / line segment)

b) If a curve begins and ends at the same point, it is known as a \_\_\_\_\_ curve. (closed/ open)

c) A \_\_\_\_\_ is made up of four-line segment. (triangle/quadrilateral)

## RUBRICS

4	3	2	1
Demonstrates and describes clear understanding of basic geometry and does all the sums correctly	Demonstrates and describes good understanding of basic geometry and does most of the sums correctly	Demonstrates satisfactory understanding of basic geometry and does sums with some mistakes	Demonstrates little understanding and does most of the sums incorrectly

### HINDI:

पाठ्य पुस्तक में पृष्ठ संख्या 26 - 28 पर प्रदत्त अभ्यास-कार्य करिए।

### UOI:

### FINDING OUT

**TASK**-You might have faced a conflict situation in real life (in school, at home or in the playground). Write your experience in the sheet given below and reflect on the way you would behave if you find yourself in the same situation in future.

**MY PROBLEM SOLVING STORY**

**What was my problem? You may draw a picture also.**

**How did I feel?**

**What did I do?**

**What can I do next time?**

**G.K.:**


Traditional Costumes: Do page 20 in the book.

World Around Us


# 13 Traditional Costumes

Most of the countries have their traditional costumes. Here are a few of them.  
**Can you identify the countries to which these traditional costumes belong?**


1




2




3




4




5




6




7




8



9




10



**HELP / BOX**

Russia	India
Namibia	Mexico
Saudi Arabia	
Mongolia	Japan
Turkey	Norway
Vietnam	Scotland

11



20

**MUSIC:**

Watch the video and practice the song.

<https://youtu.be/yF40-plWtuk>

**Creya (DLP):**

Watch the video and revise your learning.

[https://youtu.be/isQs\\_9rDBSw](https://youtu.be/isQs_9rDBSw)